

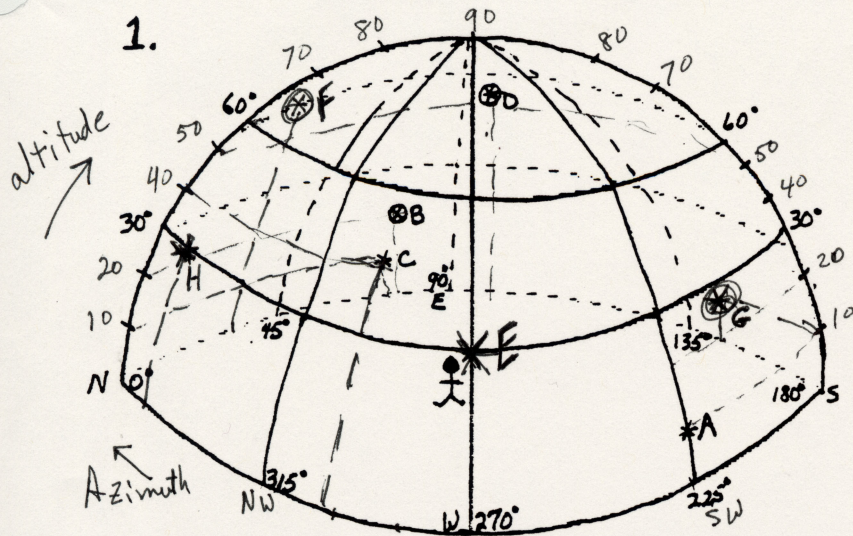
# Horizon System Worksheet

Name Star Student

See instruction sheet - Do work here:

Period \_\_\_\_\_

1.

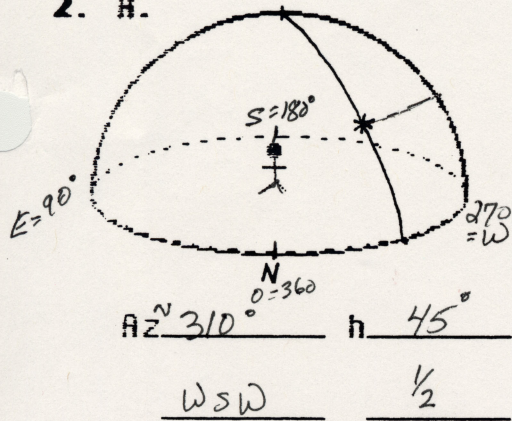


Star	Azimuth	Altitude	Common Terms	
	Az	h	Az	h
A	~225	~10°	SW	1/9
B	~80	~20	ENE	2/9
C	~40	~30°	WSW	4/9
D	N/100	~50°	FSE	5/9
E	270°	30°	W	1/3
F	30°	60°	NNE	2/3
G	148°	10°	SSW	1/9
H	350°	30°	NNW	1/3

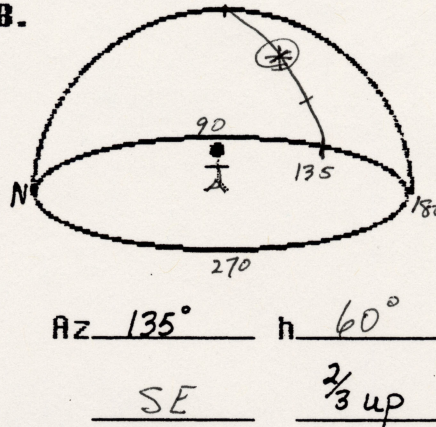
\* Represents a star on "front" of celestial sphere

⊙ Represents a star on "back" of celestial sphere

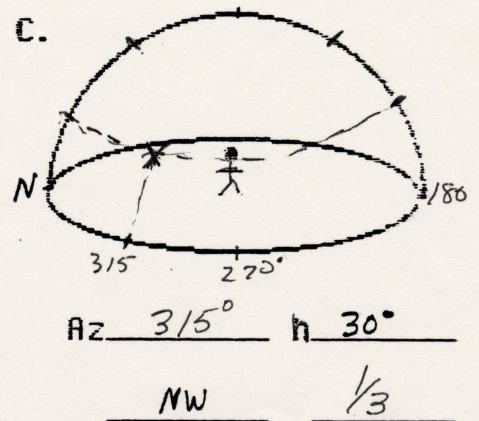
2. A.



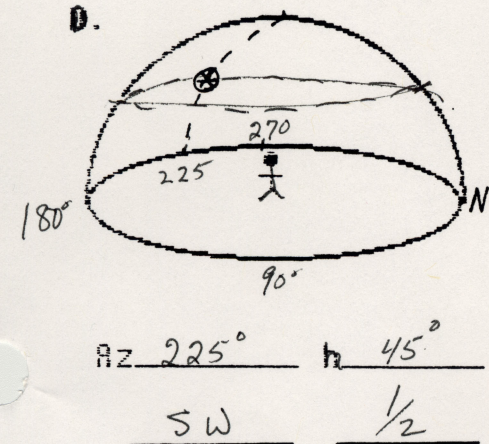
B.



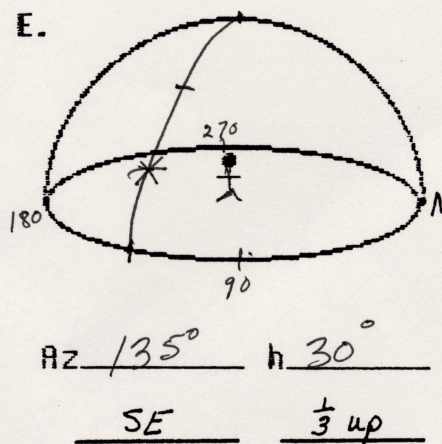
C.



D.



E.



F.

